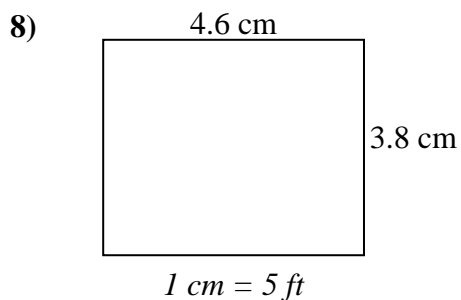
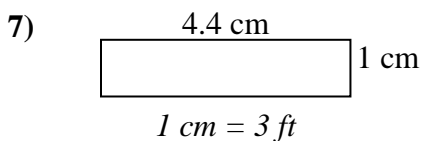
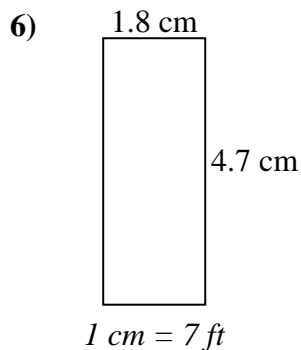
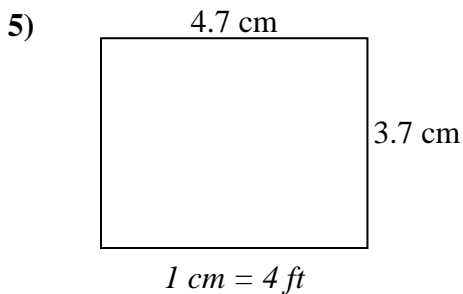
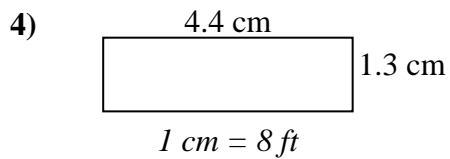
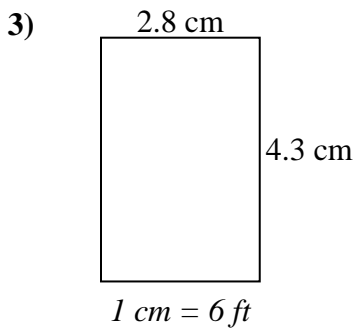
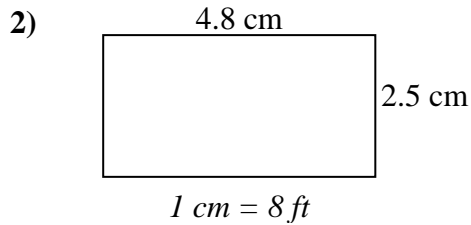
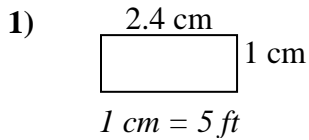




Determine the actual width, height and area of each scale rectangle.

Round the area to the nearest whole number.



Answers

1. _____

2. _____

3. _____

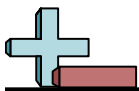
4. _____

5. _____

6. _____

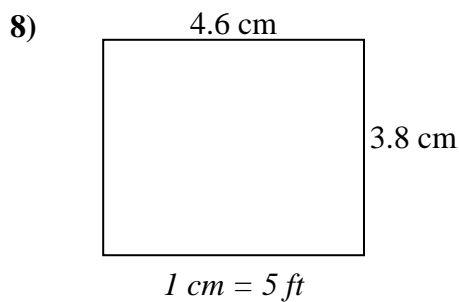
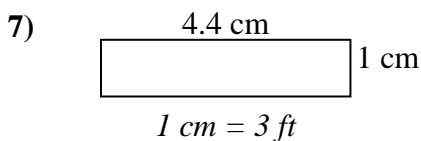
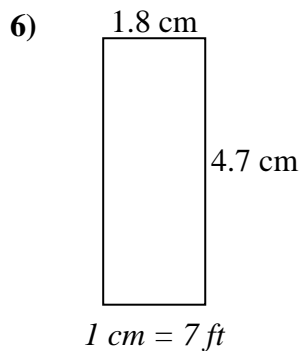
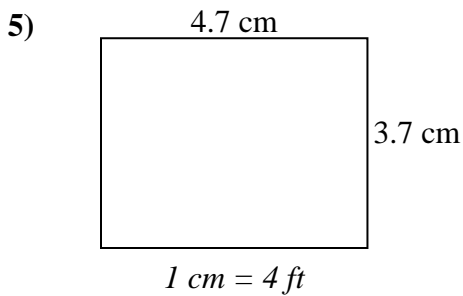
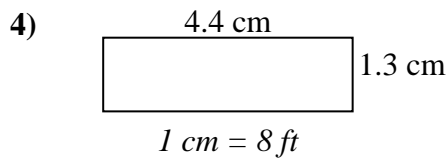
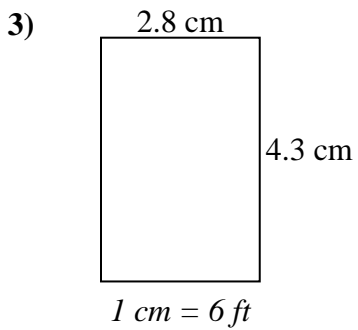
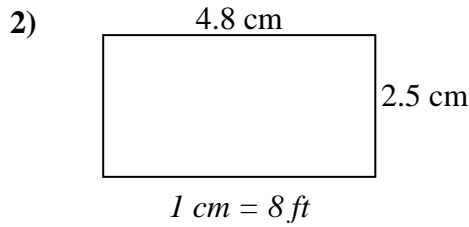
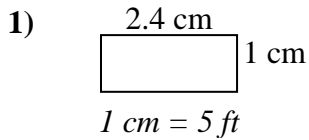
7. _____

8. _____



Determine the actual width, height and area of each scale rectangle.

Round the area to the nearest whole number.



Answers

1.	<u>12</u>	<u>5</u>	<u>60</u>
2.	<u>38.4</u>	<u>20</u>	<u>768</u>
3.	<u>16.8</u>	<u>25.8</u>	<u>433</u>
4.	<u>35.2</u>	<u>10.4</u>	<u>366</u>
5.	<u>18.8</u>	<u>14.8</u>	<u>278</u>
6.	<u>12.6</u>	<u>32.9</u>	<u>415</u>
7.	<u>13.2</u>	<u>3</u>	<u>40</u>
8.	<u>23</u>	<u>19</u>	<u>437</u>